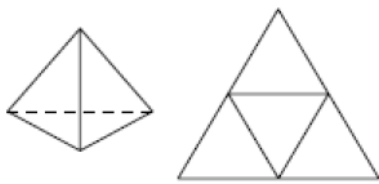


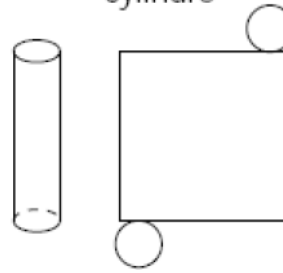
**Les patrons correspondent-ils aux solides ? entoure la bonne réponse**

tétraèdre régulier



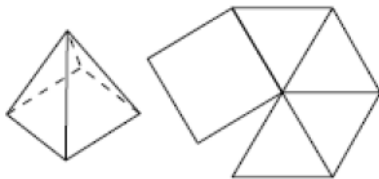
OUI  
 NON

cylindre



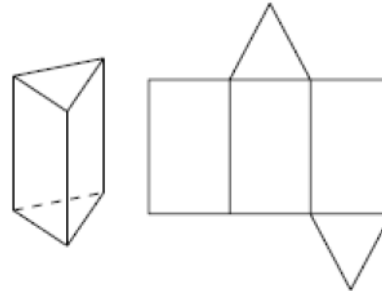
OUI  
 NON

pyramide à base carrée



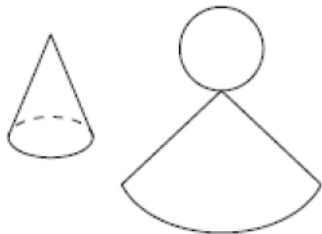
OUI  
 NON

octaèdre irrégulier



OUI  
 NON

cône



OUI  
 NON

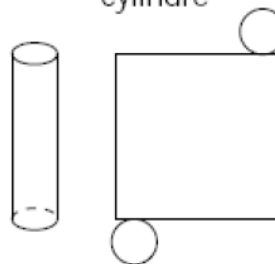
**Les patrons correspondent-ils aux solides ? entoure la bonne réponse**

tétraèdre régulier



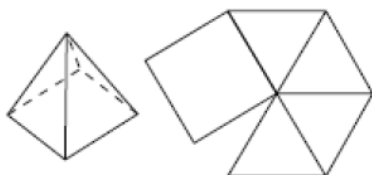
OUI  
 NON

cylindre



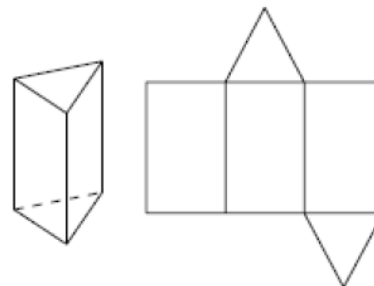
OUI  
 NON

pyramide à base carrée




OUI  
 NON

octaèdre irrégulier



OUI  
 NON

cône



OUI  
 NON