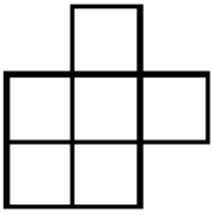
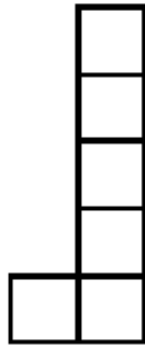

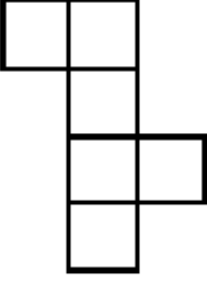
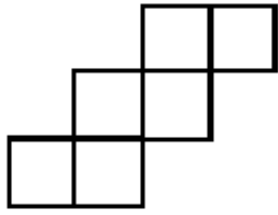
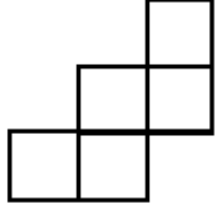
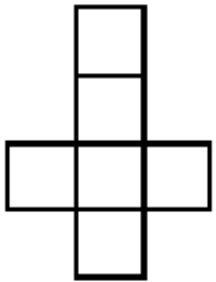
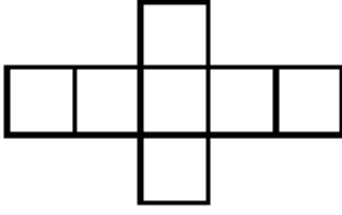
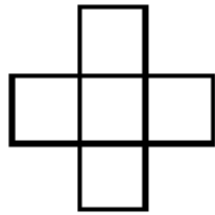


# LE CUBE

Barre, parmi, les solides ci-dessous, ceux qui ne sont pas des patrons de cube ?  
Indique tes raisons.

<p>1</p>  <p>_____</p> <p>_____</p> <p>_____</p> <p>_____</p>	<p>2</p>  <p>_____</p> <p>_____</p> <p>_____</p> <p>_____</p>	<p>3</p>  <p>_____</p> <p>_____</p> <p>_____</p> <p>_____</p>
<p>4</p>  <p>_____</p> <p>_____</p> <p>_____</p> <p>_____</p>	<p>5</p>  <p>_____</p> <p>_____</p> <p>_____</p> <p>_____</p>	<p>6</p>  <p>_____</p> <p>_____</p> <p>_____</p> <p>_____</p>
<p>7</p>  <p>_____</p> <p>_____</p> <p>_____</p> <p>_____</p>	<p>8</p>  <p>_____</p> <p>_____</p> <p>_____</p> <p>_____</p>	<p>9</p>  <p>_____</p> <p>_____</p> <p>_____</p> <p>_____</p>